



# Count & Represent Objects 1–10

Name: \_\_\_\_\_

Date: \_\_\_\_\_

Grade: Kindergarten

## Part A: Count the Objects

Count the objects in each box. Write the number on the line.

1. Count the hearts.



How many? \_\_\_\_\_

2. Count the birds.



How many? \_\_\_\_\_

3. Count the flowers.



How many? \_\_\_\_\_

4. Count the cookies.



How many? \_\_\_\_\_

## Part B: Fill in the Number

Write the missing number on the line.

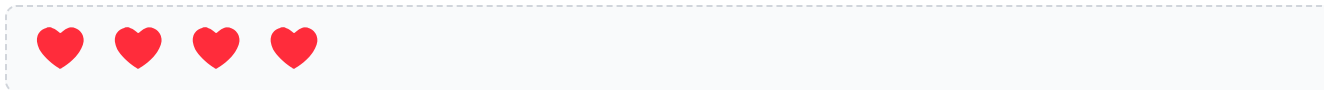
- 4, 5, \_\_\_\_\_, 7.
- 1, \_\_\_\_\_, 3, 4.
- One less than 3 is \_\_\_\_\_.
- If you count 5 stars, the last number you say is \_\_\_\_\_.

**Part A: Count the Objects**

---

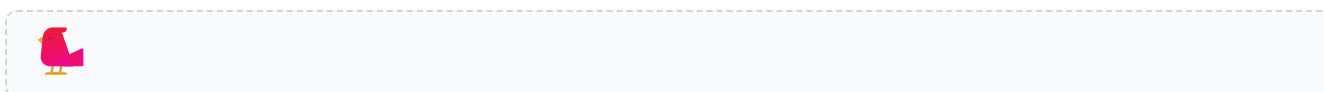
Count the objects in each box. Write the number on the line.

1. Count the hearts.



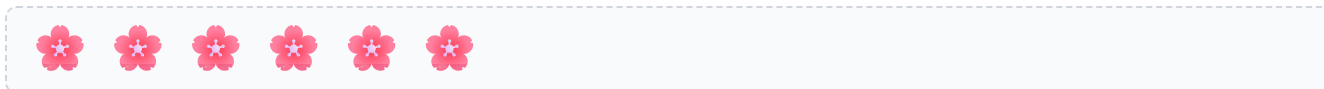
How many? 4

2. Count the birds.



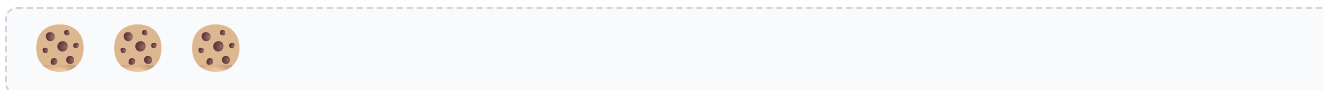
How many? 1

3. Count the flowers.



How many? 6

4. Count the cookies.



How many? 3

**Part B: Fill in the Number**

---

Write the missing number on the line.

1. 4, 5, 6, 7.

2. 1, 2, 3, 4.

3. One less than 3 is 2.

4. If you count 5 stars, the last number you say is 5.